





Me llamo:

### Subtracting Decenas

$60$	<input type="text"/>	$70$	<input type="text"/>
$-20$	<input type="text"/>	$-40$	<input type="text"/>
<hr/>	<input type="text"/>	<hr/>	<input type="text"/>
			

$90$	<input type="text"/>	$80$	<input type="text"/>
$-50$	<input type="text"/>	$-70$	<input type="text"/>
<hr/>	<input type="text"/>	<hr/>	<input type="text"/>
			

The difference between 70 and 80 is

Show Work:

What is 40 fewer than 80?

Show Work:

90 minus 80 is

Show Work:

What is 30 fewer than 90?

Show Work: